

# FOOD CHAIN AND WEBS



## VOCABULARY WORDS

Match the words to their definition!

_____	Organisms that produce their own food through photosynthesis		
_____	Organisms that only eat plants.	Also known as	_____
_____	Organisms that eat plants and animals.	Also known as	_____
_____	Organisms that eat only other animals.	Also known as	_____

PRIMARY CONSUMERS	PRODUCERS	CARNIVORES	TERTIARY CONSUMERS
SECONDARY CONSUMERS	HERBIVORES	OMNIVORES	

## FOOD CHAIN

Label each organism in this food chain!



Plant

The plant is a

\_\_\_\_\_.




Butterfly

The butterfly eats only plants. It is a

\_\_\_\_\_. Also known as a

\_\_\_\_\_.



Lizard

The lizard eats plants and animals. It is a

\_\_\_\_\_. Also known as a

\_\_\_\_\_.



Hawk

The hawk only eats animals. It is a


\_\_\_\_\_. Also known as a

\_\_\_\_\_.

PRIMARY CONSUMER	PRODUCER	CARNIVORE	TERTIARY CONSUMER
SECONDARY CONSUMER	HERBIVORE	OMNIVORE	

## FOOD WEB

How many food chains can you find in this food web? Write (or draw) them down below! Make sure you label each organism!



1.	
2.	
3.	
4.	
5	

# FOOD CHAIN AND WEBS



6.	
7.	
8.	
9.	

# FOOD CHAIN AND WEBS



## VOCABULARY WORDS

Match the words to their definition!

Producers

Organisms that produce their own food through photosynthesis

Herbivores

Organisms that only eat plants.

Also known as

Primary Consumers

Omnivores

Organisms that eat plants and animals.

Also known as

Secondary Consumers

Carnivores

Organisms that eat only other animals.

Also known as

Tertiary Consumers

PRIMARY CONSUMERS	PRODUCERS	CARNIVORES	TERTIARY CONSUMERS
SECONDARY CONSUMERS	HERBIVORES	OMNIVORES	

## FOOD CHAIN

Label each organism in this food chain!



Plant

The plant is a

Producer.




Butterfly

The butterfly eats only plants. It is a

Herbivore. Also known as a

Primary Consumer.



Lizard

The lizard eats plants and animals. It is a

Omnivore. Also known as a

Secondary Consumer.



Hawk

The hawk only eats animals. It is a


Carnivores. Also known as a

Tertiary Consumer.

PRIMARY CONSUMER	PRODUCER	CARNIVORE	TERTIARY CONSUMER
SECONDARY CONSUMER	HERBIVORE	OMNIVORE	

## FOOD WEB

How many food chains can you find in this food web? Write (or draw) them down below! Make sure you label each organism!



1.	PLANT > SNAIL > MICE > SNAKE > HAWK
2.	PLANT > APHIDS > LADYBUG > BIRD > SNAKE > HAWK
3.	PLANT > APHIDS > LADYBUG > BIRD > HAWK
4.	PLANT > APHID > BUTTERFLY > LIZARD > HAWK
5	PLANT > APHID > BUTTERFLY > LIZARD > BIRD > HAWK

# FOOD CHAIN AND WEBS



6.	PLANT > APHID > BUTTERFLY > LIZARD > BIRD > SNAKE > HAWK
7.	PLANT > BUTTERFLY > LIZARD > HAWK
8.	PLANT > BUTTERFLY > LIZARD > BIRD > HAWK
9.	PLANT > BUTTERFLY > LIZARD > BIRD > SNAKE > HAWK